

Sandipani Public School

Pendri Masturi

Affiliated to CBSE, New Delhi.

Affiliation No.3330399

Session 2022-23



Summer Holiday Assignment

Name- _____

Class - V

Section- 'A'


Nikita

[Signature]

(Subject- English)

Read the

I. Narrate a story with the help of following pictures :-



II. Read the passage carefully and answer the given questions:-

Once there lived a girl known as Helen Keller. She lived in America. In her childhood due to illness she lost her eyes and the power of hearing. Due to this problem she became deaf and blind. She was not able to speak as she didn't get the voices of the people.

1. Answer the following questions:-

1) What was the name of the girl?

Ans _____.

2) Where did she live?

Ans _____.

2. Complete the given words:-

a) A _ e r _ c _ b) p _ w _ r

3. Give T for true and F for false:-

a) Helen was a boy _____.()

b) She lost her leg in her childhood .()

III. Write Compound words of the given words:-

a) Peanut _____ and _____

b) Football _____ and _____

c) Toothpaste _____ and _____

d) Worksheet _____ and _____

e) Postman _____ and _____

IV. Find 10 hard words with meanings from Ch-1 "Politeness of the King".

(Note: Take the help from dictionary)

a) _____

b) _____

c) _____

d) _____

e) _____

f) _____

g) _____

h) _____

i) _____

j) _____

V. Complete the following conversation between Nandini and Niharika.

Nandini : Hello Niharika!

Niharika : Hi, what a pleasant surprise!

Nandini : It's been a long time since we met. Where _____ all these years?

Niharika : In Delhi. How about you? What _____ nowadays?


Nandini : I'm a fashion designer⁴ running a boutique. Last time we met you were still studying. When _____ journalism?

Niharika : In 2010. Actually I'm here for an interview with a popular television channel.

Nandini : That's a wonderful piece of news. I wish you _____.

Niharika : Thank you.

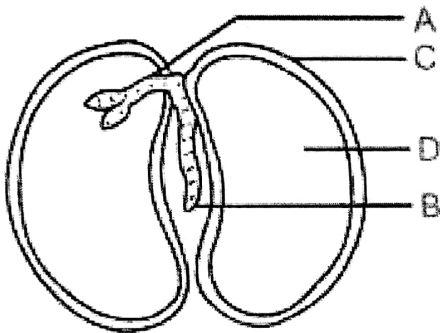
VI. Draw or paste the collage of "Butterfly".



(Note: Do cursive writing page no. 2 to 15)

(Subject-Science)**Q1 Choose the correct answer-**

- I. _____ is called the protection layer of the seeds.
 a) cotyledons b) seed coats c) plants
- II. _____ is the example of dispersal by winds.
 a) lotus b) peas c) cotton
- III. The area in which a crops are grown is called _____
 a) field b) agriculture c) leaf
- IV. The _____ crops are grown between November to April.
 a) kharif b) rabi crops c) none of them
- V. Which is called energy giving component?
 a) carbohydrates b) proteins c) vitamins
- VI. Night blindness is caused due to the deficiency of _____.
 a) vitamins A b) Vitamins B c) Vitamins D

Q2. Label the parts indicated in the figure below.**Q3 Give examples of each-**

- a) A seeds dispersed by explosion - _____
- b) A Kharif crops - _____
- c) A Rabi crops - _____
- d) A seeds dispersed by winds - _____
- e) A seeds dispersed by water - _____
- f) A seeds dispersed by animals - _____
- g) Name the plant grow from stem - _____
- h) Name the plant grow from roots - _____
- i) Name the plant grow from leaves - _____

Q4. Answer the following- (Follow Science Hub book for Question a , b , c)

- a) Explain the various steps of crop production.

Ans _____

b) Explain the different stages of germination.

Ans _____

c) Write the various way in which seeds dispersed and two examples of each.

Ans _____

d) How can the grains be protected from moisture?

Ans _____

e) Distinguish between Rabi crops and Kharif crops. Give two examples of each.

Ans _____

Q5 Define –a) Crops _____

_____b) Agriculture _____

_____c) Terracefarming _____

_____d) Germination _____

_____**Q6 Give one word answer for following – (From chapter – 2)**

a) Disease caused by the deficiency of iodine.

Ans - _____

b) Disease caused by the deficiency of calcium and phosphorus.

Ans - _____


c) Disease caused by the deficiency of iron.

Ans - _____

d) Disease caused by the deficiency of Vitamin C.

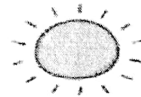
Ans - _____

Q7. Draw a diagram of Germination of Seeds .



Life cycle of a plant

1. Plants need 4 things to live .



SUNLIGHT - **AIR** - **WATER** - **SOIL**

2. Label the pictures

roots

stem

leaves

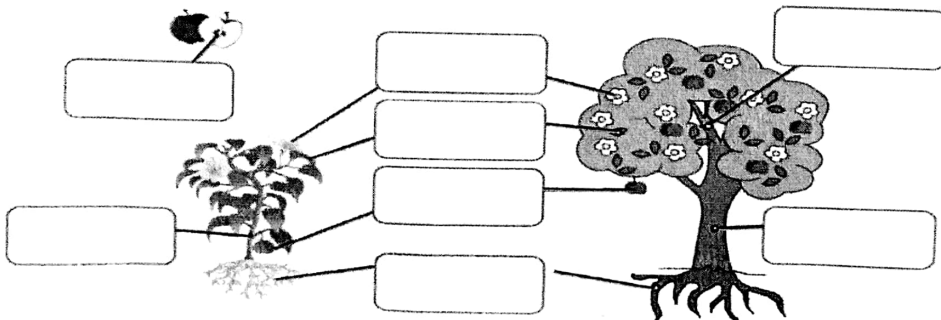
branches

seeds

flower

trunk

fruit



(Subject – Hindi)

प्र.1 भारत के राष्ट्रीय प्रतीकों का चित्र चिपकाकर नाम लिखिए -

राष्ट्रीय प्रतीक	चित्र	नाम

प्र. २ भारत में बोली जाने वाली भाषाओं के नाम लिखिए-

(१).....राठी (२) प....बी (३) हिं.....

(४) त....ल (५) गु ...रा

प्र. ३ वाक्यों को सही करके लिखिए -३

विभाग 'अ' के वाक्यों को पढ़ो।
विभाग 'ब' और 'स' में ठीक - ठीक वाक्य लिखो।



अ



ब



स

मैं पढ़ता हूँ।	तुम पढ़ते हो।	आप पढ़ते हैं।
मैं खेलता हूँ।	तुम _____	आप _____
मैं सोता हूँ।	तुम _____	आप _____
मैं रोता हूँ।	तुम _____	आप _____
मैं हँसता हूँ।	तुम _____	आप _____
मैं दौड़ता हूँ।	तुम _____	आप _____
मैं बैठता हूँ।	तुम _____	आप _____
मैं चलता हूँ।	तुम _____	आप _____
मैं उछलता हूँ।	तुम _____	आप _____
मैं कूदता हूँ।	तुम _____	आप _____

लिखो और याद करो।

१. मैं हूँ।
२. हम हैं।
३. तुम हो।
४. आप हैं।

प्र. ४ निम्नलिखित गद्यांश को पढ़कर दिए गए प्रश्नों के उत्तर लिखिए -

एक चिड़िया थी उसने एक पोटली बना ली और अच्छा या बुरा जो भी उसके साथ होता था वह एक छोटा सा पत्थर उस पोटली में डाल देती थी कुछ ही दिनों में उसकी पोटली बहुत भारी हो गयी जिस कारण वह चिड़िया उड़ नहीं पा रही थी। कुछ और दिन बीतने पर उसका चलना फिरना भी मुश्किल हो गया। हम भी अगर पुरानी अप्रिय बातों को भूलकर भविष्य के पथ पर अग्रसर नहीं होंगे तो हम कभी वर्तमान का आनंद नहीं ले पाते हैं।

1. चिड़िया पोटली में क्या डाल देती थी?

2. चिड़िया उड़ क्यों नहीं पा रही थी ?

3. कुछ और दिन बीतने पर क्या हुआ ?

4. इस गद्यांश से हमें क्या शिक्षा मिलती है ?

5. विलोम शब्द लिखो - क : आसान ख : नयी ग : प्रिय घ : शोक

प्र-५ . चित्र को देखकर (पेड़ लगाओ) विषय पर निबंध लिखिए (१५० शब्दों में)



(Subject- Maths)**Q1. Write in words.**i) 9,98,49,375 - _____
_____ii) 98,68,69,493 - _____
_____iii) 46,55,74,830 - _____
_____iv) 999,072,327 - _____
_____v) 348,002,236 - _____
_____**Q2. Write the expanded form of the following numbers.**i) 9,73,58,443 - _____
_____ii) 444,065,239 - _____
_____iii) 18,92,46,789 - _____
_____iv) 9,98,49,673 - _____
_____v) 700,003,634 - _____

Q3. Write the Roman numeral for numbers 1 to 60 in the grid given below.

1		11		21	
2		12		22	
3		13		23	
4		14		24	
5		15		25	
6		16		26	
7		17		27	
8		18		28	
9		19		29	
10		20		30	

31		41		51	
32		42		52	
33		43		53	
34		44		54	
35		45		55	
36		46		56	
37		47		57	
38		48		58	
39		49		59	
40		50		60	

Q4. Write expanded notation of the following numbers.

i) 635,780,946 - _____

ii) 68,37,239 - _____

iii) 51,52,25,386 - _____

iv) 843,749,517 - _____

v) 989,765,946 - _____


Q5. Make a Place value chart of INDIAN SYSTEM and INTERNATIONAL SYSTEM.

26. Make

Q6. Make ROMAN NUMBER WATCH by cutting and pasting match sticks.

(Subject- Social Studies)**1. Fill in the blanks :**

- a) In our daily lives, we depend a lot on our _____ and _____.
- b) The Earth is revolving around the _____.
- c) One complete rotation of the Earth on its axis takes _____ day.
- d) _____ and _____ are the imaginary lines drawn on the Earth's surface.
- e) A leap year has _____ days.

2. Draw the diagram of 'Solar System'.**3. Explain all the planets of the Solar System including Sun :**

- a) _____
- b) _____
- c) _____

- d) _____
- e) _____
- f) _____
- g) _____
- h) _____
- i) _____

4. Write short answer of these questions:

a) What are Latitudes?

b) What are Poles?

c) What are Meridians?

d) What is International Date Line?

5. Observe the sky at night and share your feelings in a short note.

6. On an outline map of India, locate and label the following given States:

- a) Chhattisgarh b) Gujarat c) Maharashtra
- d) Rajasthan e) Bihar f) Tamil Nadu

