

# **Sandipani Public School**

## **Pendri Masturi**

Affiliated to CBSE, New Delhi.

Affiliation No.3330399

### **Session 2022-23**



### **Summer Holiday Assignment**

**Name-** \_\_\_\_\_

**Class - III**

**Section- 'A'**



## Subject: ENGLISH





### I. Fill in the blanks with the correct Pronoun:-



( It, This, our, I, we )

- \_\_\_\_\_ is a picture of a book.
- \_\_\_\_\_ love my book.
- \_\_\_\_\_ has many pages.
- \_\_\_\_\_ must respect and protect the books.
- Books are \_\_\_\_\_ friends.

### II. Use the picture and complete the story:-

Today, I went to a market to buy a cricket  \_\_\_\_\_ and a  
 \_\_\_\_\_. Suddenly I found a  \_\_\_\_\_ on the way who  
 was very hungry. I carried the  \_\_\_\_\_ to my   
 \_\_\_\_\_ and now I am very happy. I forgot to buy  
 my own thing

**IV. Describe the given pictures within 5 lines :-**



- a) \_\_\_\_\_
- b) \_\_\_\_\_
- c) \_\_\_\_\_
- d) \_\_\_\_\_
- e) \_\_\_\_\_

**V. Complete the given words with (a / o / e / i):-**

a) t\_\_ ch\_\_r

b) ch\_\_ld

c) g\_\_ t

d) b\_\_rd

e) eng\_\_n

f) b\_\_sy

g) G\_\_t

h) sp\_\_d\_\_r

i) g\_\_rd\_\_n

j) sl\_\_p

**III. Read the passage carefully and answer the given questions:-**

I have a cat. The cat has a yellow ball. It also loves to chew the ball. I also have a dog. My dog and my cat are good friends. They like each other. My dog has a blue ball. Both love to play. They run after the ball and bring them to me. My cat has kittens. They like to play with the ball. I have two balls in all.

**1) Answer the following questions:-**

a) Who are good friends?

Ans \_\_\_\_\_.

b) What do the dog has?

Ans \_\_\_\_\_.

**2) Fill in the blanks:-**

a) The cat has \_\_\_\_\_ ball.

b) Both love to \_\_\_\_\_.

c) My cat has \_\_\_\_\_.

d) They like to play with \_\_\_\_\_.

**3) Complete the following words :-**

a) Ye\_ \_ow

b) Ki\_ \_en

## VI. Sort these nouns into different group

|          |             |       |         |
|----------|-------------|-------|---------|
| SCHOOL   | PARK        | HEN   | TEACHER |
| ELEPHANT | MUMBAI      | PHONE | PEN     |
| GARDEN   | BULB        | LION  | RAM     |
| UNCLE    | GRANDFATHER | DUCK  |         |

| <u>PERSON</u> | <u>PLACES</u> | <u>ANIMALS</u> | <u>THINGS</u> |
|---------------|---------------|----------------|---------------|
| 1)            | 1)            | 1)             | 1)            |
| 2)            | 2)            | 2)             | 2)            |
| 3)            | 3)            | 3)             | 3)            |
| 4)            | 4)            | 4)             | 4)            |
| 5)            | 5)            | 5)             | 5)            |

## VI. Answer the following question:-

a) Why do you think the maiden was welcomed whenever she went?

Ans: \_\_\_\_\_  
 \_\_\_\_\_.

b) How does the face of little maiden look like?

Ans: \_\_\_\_\_  
 \_\_\_\_\_.

c) What kind of voice has the little maiden?

Ans: \_\_\_\_\_  
\_\_\_\_\_.

d) Have ever met the little maiden?

Ans: \_\_\_\_\_  
\_\_\_\_\_.

e) What is the name of the little maiden described in the poem?

Ans: \_\_\_\_\_  
\_\_\_\_\_.

( Note: Do cursive writing page no. 2 to 15)

**Subject: Maths**

1. Write in order from 666 to 710.

|  |  |  |
|--|--|--|
|  |  |  |
|  |  |  |

|  |  |  |
|--|--|--|
|  |  |  |
|  |  |  |

|  |  |  |
|--|--|--|
|  |  |  |
|  |  |  |

|  |  |  |
|--|--|--|
|  |  |  |
|  |  |  |

|  |  |  |
|--|--|--|
|  |  |  |
|  |  |  |

|  |  |  |
|--|--|--|
|  |  |  |
|  |  |  |

|  |  |  |
|--|--|--|
|  |  |  |
|  |  |  |

|  |  |  |
|--|--|--|
|  |  |  |
|  |  |  |

|  |  |  |
|--|--|--|
|  |  |  |
|  |  |  |

|  |  |  |
|--|--|--|
|  |  |  |
|  |  |  |

|  |  |  |
|--|--|--|
|  |  |  |
|  |  |  |

|  |  |  |
|--|--|--|
|  |  |  |
|  |  |  |

|  |  |  |
|--|--|--|
|  |  |  |
|  |  |  |

|  |  |  |
|--|--|--|
|  |  |  |
|  |  |  |

|  |  |  |
|--|--|--|
|  |  |  |
|  |  |  |

|  |  |  |
|--|--|--|
|  |  |  |
|  |  |  |

|  |  |  |
|--|--|--|
|  |  |  |
|  |  |  |

|  |  |  |
|--|--|--|
|  |  |  |
|  |  |  |

|  |  |  |
|--|--|--|
|  |  |  |
|  |  |  |

|  |  |  |
|--|--|--|
|  |  |  |
|  |  |  |

|  |  |  |
|--|--|--|
|  |  |  |
|  |  |  |

|  |  |  |
|--|--|--|
|  |  |  |
|  |  |  |

|  |  |  |
|--|--|--|
|  |  |  |
|  |  |  |

|  |  |  |
|--|--|--|
|  |  |  |
|  |  |  |

|  |  |  |
|--|--|--|
|  |  |  |
|  |  |  |

|  |  |  |
|--|--|--|
|  |  |  |
|  |  |  |

|  |  |  |
|--|--|--|
|  |  |  |
|  |  |  |


|  |  |  |
|--|--|--|
|  |  |  |
|  |  |  |

|  |  |  |
|--|--|--|
|  |  |  |
|  |  |  |

|  |  |  |
|--|--|--|
|  |  |  |
|  |  |  |

|  |  |  |
|--|--|--|
|  |  |  |
|  |  |  |

|  |  |  |
|--|--|--|
|  |  |  |
|  |  |  |





## 2. Write in words.

- a) 596 = \_\_\_\_\_  
 b) 652 = \_\_\_\_\_  
 c) 2111 = \_\_\_\_\_  
 d) 8413 = \_\_\_\_\_

## 3. Write in numerals

- a) Five hundred and sixty eight = \_\_\_\_\_  
 b) One hundred and five = \_\_\_\_\_  
 c) Four thousand one hundred twenty two = \_\_\_\_\_  
 d) Nine thousand and seventeen = \_\_\_\_\_

## 4. Write down the place value and face value of underlined digits.

| Number        | Place | Place value of | Face value |
|---------------|-------|----------------|------------|
| <u>8</u> 91   |       |                |            |
| <u>1</u> 82   |       |                |            |
| 4 <u>3</u> 52 |       |                |            |
| 149 <u>8</u>  |       |                |            |

## 5. Write in expanded form .

- a) 989 = \_\_\_\_\_ + \_\_\_\_\_ + \_\_\_\_\_  
 b) 665 = \_\_\_\_\_ + \_\_\_\_\_ + \_\_\_\_\_  
 c) 6502 = \_\_\_\_\_ + \_\_\_\_\_ + \_\_\_\_\_ + \_\_\_\_\_  
 d) 4692 = \_\_\_\_\_ + \_\_\_\_\_ + \_\_\_\_\_ + \_\_\_\_\_

### 6. Write in compact form .

a)  $9000 + 900 + 0 + 6 =$  \_\_\_\_\_

b)  $5000 + 400 + 20 + 1 =$  \_\_\_\_\_

c)  $700 + 60 + 5 =$  \_\_\_\_\_

d)  $300 + 20 + 1 =$  \_\_\_\_\_

### 7. Write the largest and smallest numbers with the given digits .

i.  $2, 6, 0 =$  \_\_\_\_\_

ii.  $4, 1, 6 =$  \_\_\_\_\_

iii.  $1, 5, 9, 7 =$  \_\_\_\_\_

iv.  $7, 9, 8, 0 =$  \_\_\_\_\_

### 8. Complete the pattern .

i. 310 320 330 \_\_\_\_\_

ii. 493 496 499 \_\_\_\_\_

iii. 706 712 718 \_\_\_\_\_

iv. 110 120 130 \_\_\_\_\_

### 8. Use the correct sign . ( < , > , = )

a)  $791$  \_\_\_\_\_  $971$

b)  $403$  \_\_\_\_\_  $304$

c)  $648$  \_\_\_\_\_  $6 \text{ tens} + 4 \text{ hundreds} + 8 \text{ ones}$

d)  $5 \text{ hundreds} + 3 \text{ tens} + 2 \text{ ones}$  \_\_\_\_\_  $235$

e)  $881$  \_\_\_\_\_  $118$

f)  $500 + 60 + 4$  \_\_\_\_\_  $600 + 60 + 4$

g)  $6 \text{ hundreds} + 3 \text{ tens} + 4 \text{ ones}$  \_\_\_\_\_  $634$

**7. Answer the following .**

- 1) The smallest 3 digit number = \_\_\_\_\_
- 2) The largest 3 digit number = \_\_\_\_\_
- 3) Place value of 8 in 846 = \_\_\_\_\_
- 4) One less than largest 3 digit number = \_\_\_\_\_
- 5) Sum of 668 and 284 = \_\_\_\_\_
- 6) Difference between 702 – 347 = \_\_\_\_\_
- 7) Increase 46 by 5 = \_\_\_\_\_
- 8) Decrease 75 by 8 = \_\_\_\_\_
- 9) Total of 5 tens , 1 ten and 4 tens is = \_\_\_\_\_
- 10) What must be added to 37 to make 44 = \_\_\_\_\_

**SUBJECT – HINDI**

प्र.1 भारत के राष्ट्रीय प्रतीकों का चित्र चिपकाकर नाम लिखिए -


| राष्ट्रीय प्रतीक | चित्र | नाम |
|------------------|-------|-----|
|                  |       |     |

प्र.२ बारहखड़ी याद करके लिखिए-

A large rectangular box containing 24 horizontal dotted lines for writing.

A smaller rectangular box at the bottom of the page containing 3 horizontal dotted lines for writing.

प्र.३ उदाहरण देखकर समझिये तथा संज्ञा शब्दों के नाम लिखिए -



प्र-४. निर्देशानुसार करे -

1. भाषा को लिपियों से मिलाइए।

- |               |                |
|---------------|----------------|
| (क) हिंदी     | (i) रोमन       |
| (ख) अंग्रेज़ी | (ii) गुरुमुखी  |
| (ग) उर्दू     | (iii) देवनागरी |
| (घ) पंजाबी    | (iv) फ़ारसी    |

2. संयुक्ताक्षरों से बनने वाले दो-दो शब्द लिखिए।

- |         |   |       |       |
|---------|---|-------|-------|
| (क) क्ष | - | ..... | ..... |
| (ख) श्र | - | ..... | ..... |
| (ग) ज्ञ | - | ..... | ..... |

3. चंद्रबिंदु तथा बिंदु से बनने वाले दो-दो शब्द लिखिए।

- |            |       |       |
|------------|-------|-------|
| चंद्रबिंदु | ..... | ..... |
| बिंदु      | ..... | ..... |

4. विलोम शब्द लिखिए।

- |           |   |       |            |   |       |
|-----------|---|-------|------------|---|-------|
| (क) कड़वा | X | ..... | (ख) दोस्त  | X | ..... |
| (ग) हलका  | X | ..... | (घ) सरल    | X | ..... |
| (ङ) उदय   | X | ..... | (च) कमज़ोर | X | ..... |

प्र-५ . चित्र को देखकर उसके विषय मे पांच से आठ लाइन लिखिए -



A large rectangular area containing ten horizontal dotted lines for writing the answer.








**Subject: Science**

**I. Write 10 living things and non living things which you see around your surroundings.**

| <u>Living things</u> | <u>Non Living things</u> |
|----------------------|--------------------------|
| 1                    |                          |
| 2                    |                          |
| 3                    |                          |
| 4                    |                          |
| 5                    |                          |
| 6                    |                          |
| 7                    |                          |
| 8                    |                          |
| 9                    |                          |
| 10                   |                          |

**II. Collect 5 different kinds of Pulses and stick it.**





**III. Draw the picture of "Plant " and label it.**



**IV. Answer the following question:**

**a) What is your name?**

**Ans:** \_\_\_\_\_

**b) In which school do you study?**

**Ans:** \_\_\_\_\_


**c) Who is your class teacher?**

**Ans:** \_\_\_\_\_

**d) What does your father do?**

**Ans:** \_\_\_\_\_

V. Draw any one of your favourite summer fruit and write 5 lines on it.



- a) \_\_\_\_\_
- b) \_\_\_\_\_
- c) \_\_\_\_\_
- d) \_\_\_\_\_
- e) \_\_\_\_\_

## Subject: Social studies

1. Answer the following questions -

a. What is Universe ?

---

---

b. Is there any thing beyond the universe too ?

---

---

c. What is a galaxy ?

---

---

d. What is our galaxy called ?

---

---

2. Complete the names of the 8 planet .

a. ME \_ C \_ R \_

b. M \_ R \_

c. V \_ N \_ S

d. JU \_ I \_ ER

e. S \_ T \_ RN

f. UR \_ N \_ S

g. E \_ R \_ H

h. N \_ P \_ U \_ E

3. Write T for true and F for false statement .

- a. We live in Mars .
- b. Earth is called as Blue Planet .
- c. Mercury is the biggest planet in the solar system .
- d. Mars is called as Red Planet .
- e. Saturn has rings .
- f. There are 10 planets in the solar system .
- g. Sun is the head of solar system .
- h. All planets moves around the Sun .

4. Multiple Choice Questions .

- a. The Sun is the head of \_\_\_\_\_
  - i. solar system
  - ii. milky way
  - iii. galaxy
- b. The name of our galaxy is \_\_\_\_\_
  - i. milky way
  - ii. galaxy
  - iii. universe
- c. The sun is a \_\_\_\_\_
  - i. star
  - ii. galaxy
  - iii. planet
- d. Which one is the smallest planet in solar system \_\_\_\_\_ .

- i. Mercury
- ii. Venus
- iii. Saturn

e. Which planet has life on it ?

- i. Earth
- ii. Neptune
- iii. Venus

f. Which is the largest planet in solar system ?

- i. Earth
- ii. Neptune
- iii. Jupiter

g. Which planet has rings around it ?

- i. Mars
- ii. Saturn
- iii. Venus

h. The model of the Earth is called \_\_\_\_\_ .

- i. Globe
- ii. map
- iii. compass

i. The shape of the earth is \_\_\_\_\_

- i. sphere
- ii. square
- iii. triangle

j. The Sun rises in the \_\_\_\_\_

- i. east
- ii. west
- iii. north

Sets = 10

5. Colour the planets as they are -

